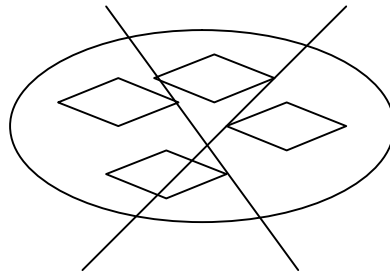
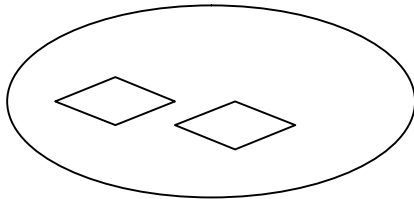
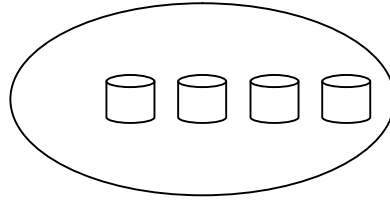
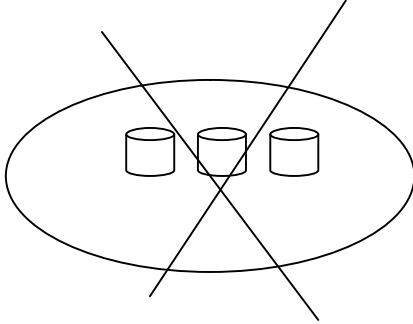
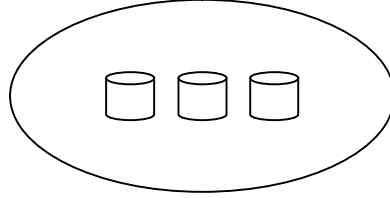
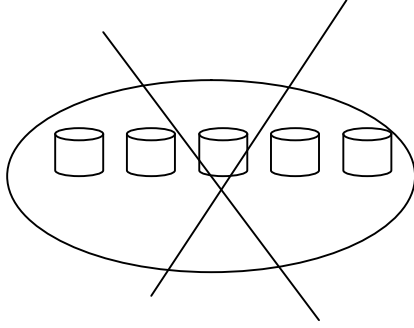


التاريخ:-----

ورقة عمل للصف الأول

الاسم:-----

1) أكتب تمرينًا ملائمًا للرسم:-



(2) أكمل الناقص:-

$$10 - \underline{\quad} < 5$$

$$6 - \underline{\quad} > 2$$

$$\underline{\quad} + \underline{\quad} = 7$$

$$\underline{\quad} + \underline{\quad} > 8$$

$$\underline{\quad} - \underline{\quad} = 7$$

$$\underline{\quad} - \underline{\quad} = 9$$

(3) أكتب <، > أو = :-

$$5 - 5 \quad \underline{\quad} \quad 5 + 5$$

$$3 + 0 \quad \underline{\quad} \quad 3 - 0$$

$$6 - 5 \quad \underline{\quad} \quad 6 + 5$$

$$9 - 1 \quad \underline{\quad} \quad 4 + 4$$

$$1 + 5 \quad \underline{\quad} \quad 6 - 5$$

$$2 + 2 \quad \underline{\quad} \quad 4 - 4$$