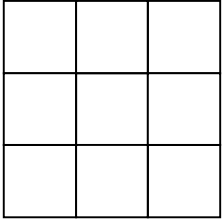


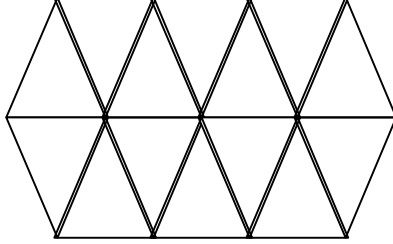
الكسر كجزء من واحد صحيح

(1) لوّن الكسر المطلوب:-

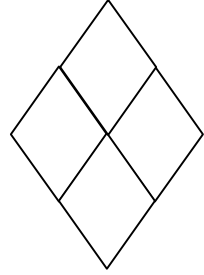
$$\frac{8}{9}$$



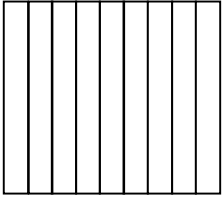
$$\frac{10}{14}$$




$$\frac{3}{4}$$



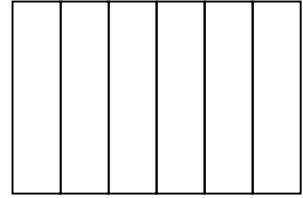
$$\frac{3}{9}$$



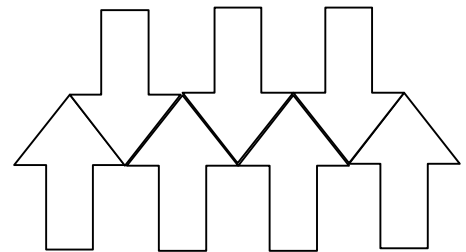

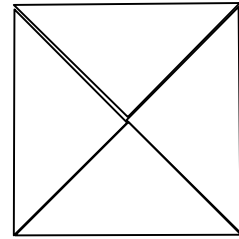
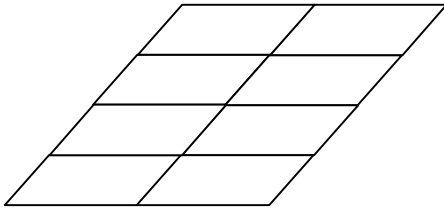
$$\frac{1}{2}$$



$$\frac{2}{6}$$



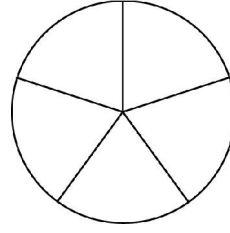
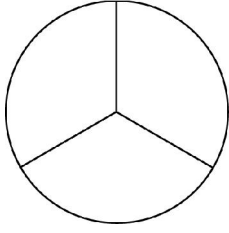
(2) أكتب كسرا كرغبتك ثمّ لوّن:-



1

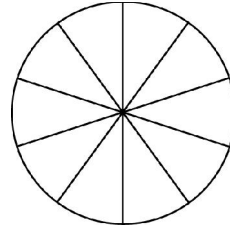
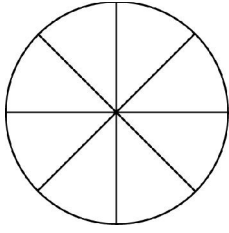
3) لون ثم اكتب الكسر في المربع بالأرقام والكلمات:-

1.



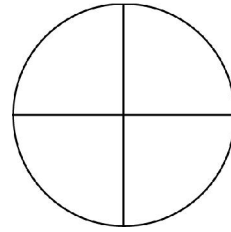
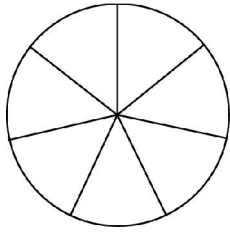
4.

2.




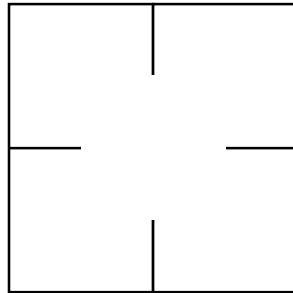
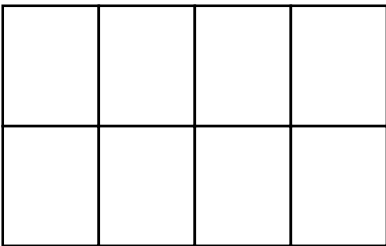
5.

3.

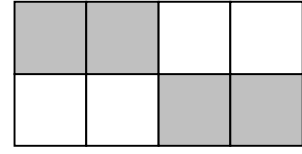



6.

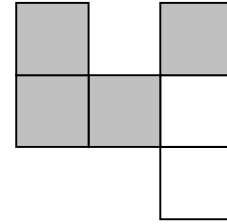
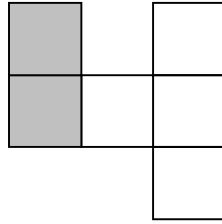
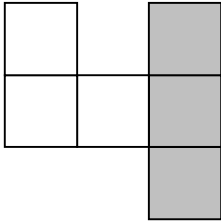
4) لون الكسر $\frac{1}{4}$ في كل شكل من الأشكال الآتية:-



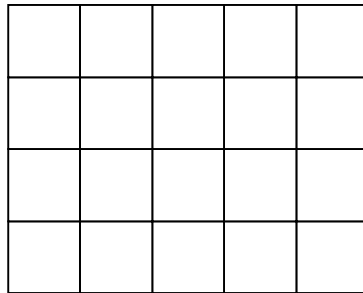
(5) أخط الأشكال الذي يظهر فيها الكسر $\frac{1}{2}$:-



(6) أخط الشكل الذي يظهر فيه الكسر $\frac{1}{3}$:-



(7) أ- لوّن $\frac{2}{5}$ الشكل الآتي :-



ب- لوّن $\frac{3}{4}$ الشكل الآتي :-

