

أنواع الزوايا للصف السّابع

الاسم: _____

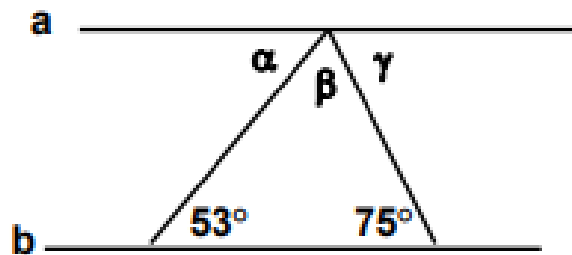
(1) معطى $a \parallel b$.

احسب مقدار الزوايا: α و β و γ :-

$\alpha =$ _____

$\beta =$ _____

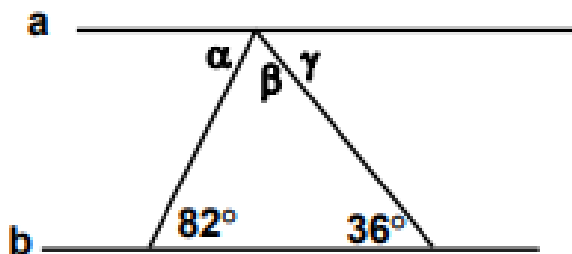
$\gamma =$ _____

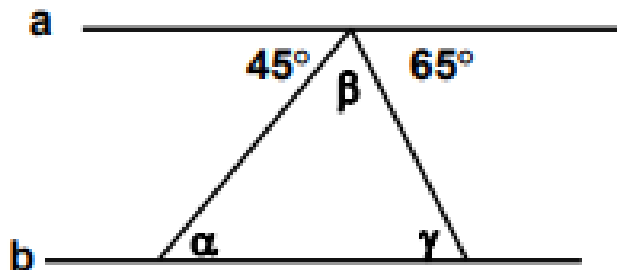


$\alpha =$ _____

$\beta =$ _____

$\gamma =$ _____





$\alpha =$ _____

$\beta =$ _____

$\gamma =$ _____