

مقارنة الكسور العادية للصف الخامس

1) اكتب > ، < أو = :-

$\frac{2}{8}$ ○ $\frac{5}{8}$

$\frac{1}{6}$ ○ $\frac{4}{6}$

$\frac{2}{5}$ ○ $\frac{4}{5}$

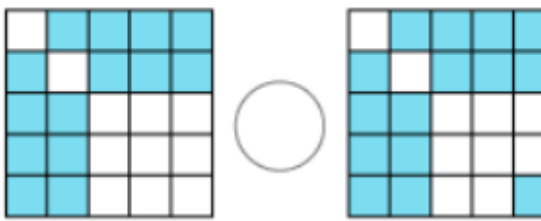
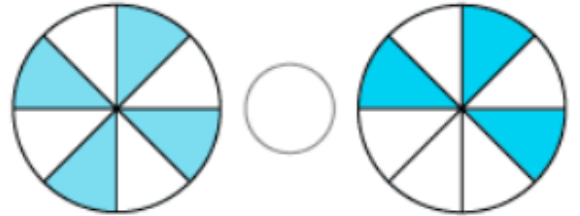
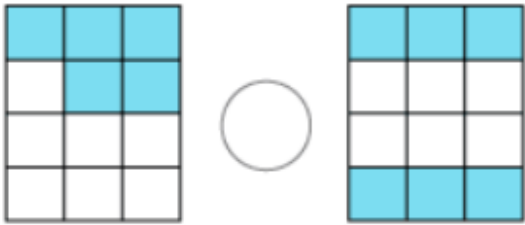
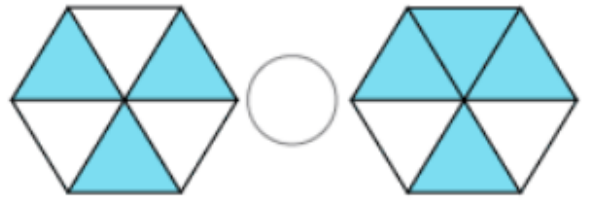
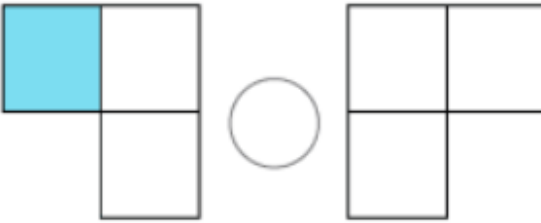
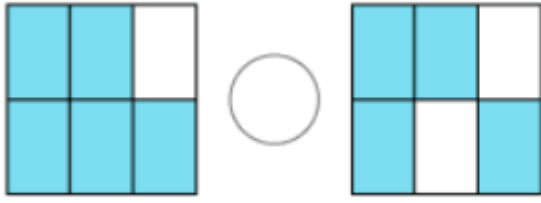
$\frac{2}{5}$ ○ $\frac{4}{5}$

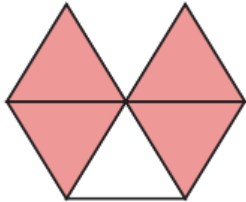
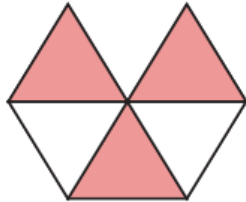
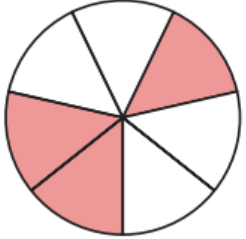
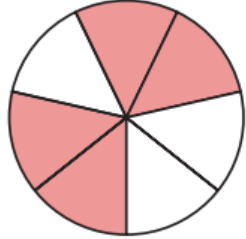
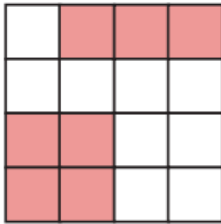
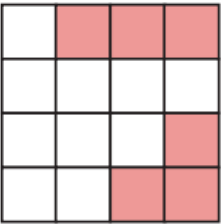
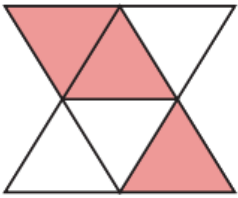
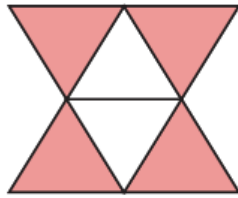
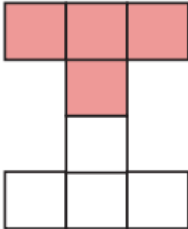
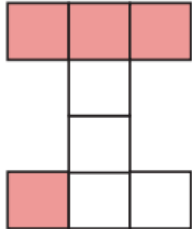
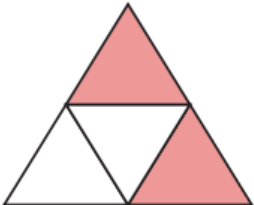
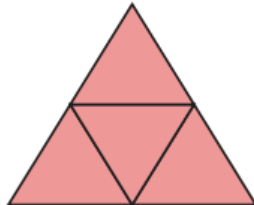
$\frac{2}{5}$ ○ $\frac{4}{5}$

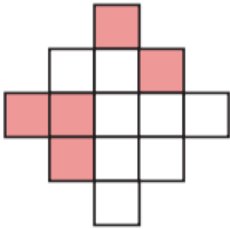
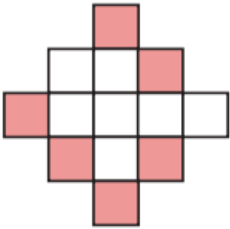
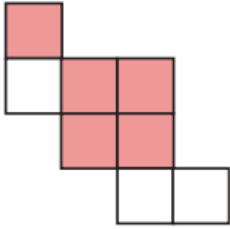
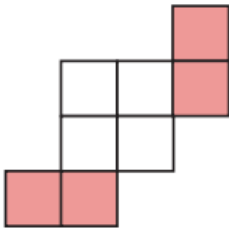
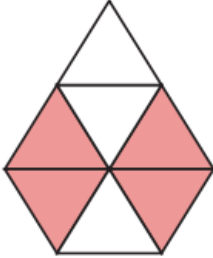
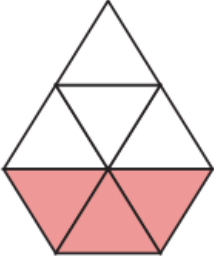
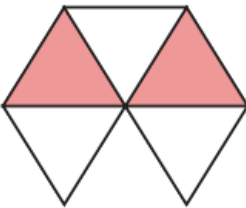
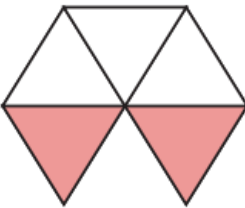
$\frac{1}{7}$ ○ $\frac{5}{7}$

$\frac{2}{3}$ ○ $\frac{1}{3}$

2) اكتب > ، < أو = :-



 <input type="radio"/> 	 <input type="radio"/> 
 <input type="radio"/> 	 <input type="radio"/> 
 <input type="radio"/> 	 <input type="radio"/> 

 <input type="radio"/> 	 <input type="radio"/> 
 <input type="radio"/> 	 <input type="radio"/> 

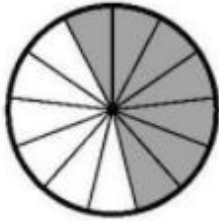
3) اكتب > ، < أو = :-



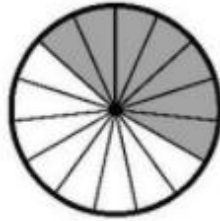
$\frac{2}{5}$



$\frac{4}{5}$




$\frac{7}{13}$




$\frac{7}{15}$



$\frac{2}{11}$



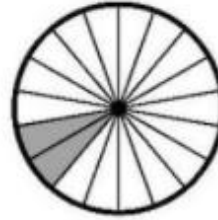
$\frac{2}{20}$



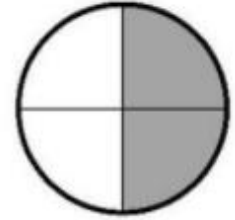
$\frac{3}{19}$




$\frac{3}{7}$




$\frac{2}{18}$



$\frac{2}{4}$



$\frac{1}{10}$



$\frac{1}{9}$